





(14A)

25. Rose's clock showed **quarter of eight**. At which clock was she looking?



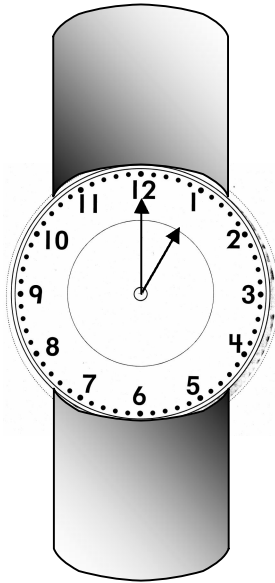
(14A)

26. Gary's clock at home showed the time below. What time was it?



- Quarter of 2
- quarter of 3
- Half-past 2
- Quarter after 3


(14A)



27. Rob looked at his watch to see what time it was. What time did his watch show?

- 11:00
- 12:00
- 1:00
- 1:30

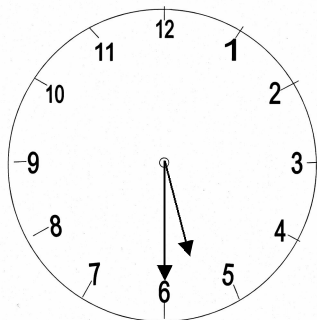
(14A)



28. Zach fed his pet hippo at the time shown on the clock. What time does the clock show?

- 1:15
- 1:45
- 2:15
- 2:45

(14A)







29. Alex ate supper at the time shown on the clock. At what time did Alex eat supper?

- quarter after 5
- half-past 5
- half-past 6
-

quarter of 6

(14A)

30. Stephanie started watching TV at **quarter after six**. What clock shows that time?



(14A)



31. Debbie and Carolyn left to go shopping at the time shown on the clock. What time did they leave?

- quarter of 8
- half-past 8
- quarter of 9
- half-past 9

(14B)

Use the calendar to answer questions 32 – 34.

AUGUST						
Sun	Mon	Tues	Wed	Thurs	Fri	Sat
		1	2	3	4	5
6	7	8	9	10	11	12
13	14	15	16	17	18	19
20	21	22	23	24	25	26
27	28	29	30	31		

32. Jeannie is planning to go to the beach on August eighth. What day is that?

- Thursday
- Tuesday
- Saturday
- Sunday

33. On the calendar above, which date is the third Thursday of the month?

- August 3
- August 15
- August 17
- August 31

34. Jeanne has to go to the dentist on August 21. Which day is August 21?

- 2nd Wednesday
- 4th Tuesday
- 2nd Tuesday
- 4th Wednesday

35. Michael and Arturo went underwater scuba diving from 7:30 to 9:00 A.M. How long did they stay underwater?

- 1 hour, 15 minutes
- 1 hour, 30 minutes
- 2 hours, 15 minutes
- 2 hours, 30 minutes

(14B)

36. Josie practiced the piano for one hour. If she started at half-past three, at what time did she finish?

- 3:30
- 3:45
- 4:15
- 4:30

This is probably
not a typical
Obj. 14B
question.

(14B)

37. Baseball practice began at 3:30 and ended 45 minutes later. At what time did baseball practice end?

- 3:45
- 4:00
- 4:15
- 4:30