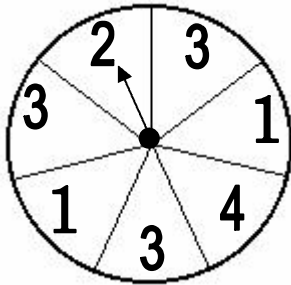


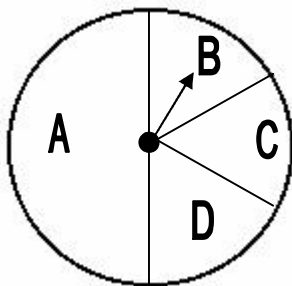
Name _____ Date _____

1. Amanda spun the spinner once. The arrow landed on 2. If Amanda spins the spinner another time, on which number is the arrow MOST likely to land?



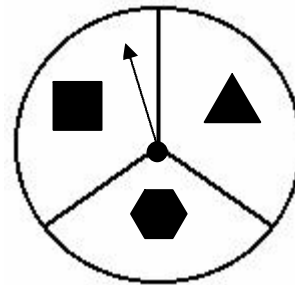
- a 1
- b 2
- c 3
- d 4

2. Daniel spun the spinner. The arrow landed on B. If Daniel spins the spinner one more time, on which letter is the arrow MOST likely to land?



- f A
- g B
- h C
- j D

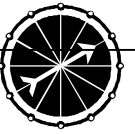
3. Tyler spun the spinner once. The arrow landed on the . If he spins the spinner another time, on which shape is the arrow MOST likely to land?



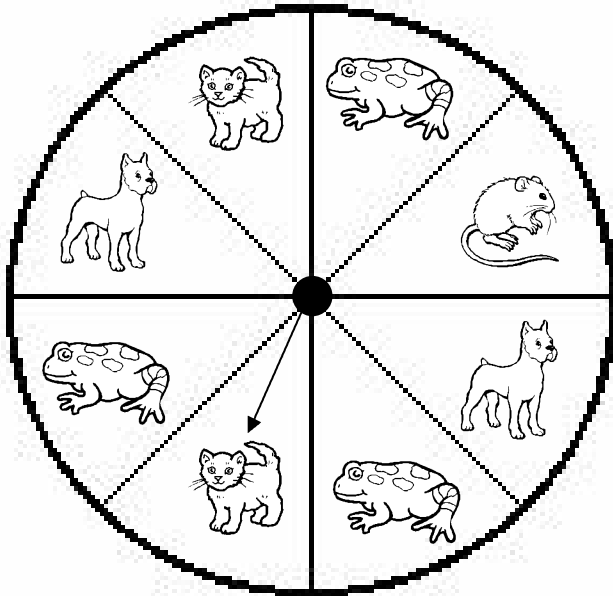
- a The arrow is EQUALLY likely to land on any of the 3 shapes.
- b The arrow is MOST likely to land on .
- c The arrow is MOST likely to land on .
- d The arrow is MOST likely to land on .





4. Megan put some jellybeans in a paper bag. 25 were black, 20 were red, 28 were green, and 23 were yellow. If she pulls out one jelly bean WITHOUT LOOKING in the bag, which jelly bean color is she LEAST likely to pick?

- f green
- g black
- h yellow
- j red



5. Katherine spun the spinner once. If she spins the spinner one more time, on which animal is she LEAST likely to land?

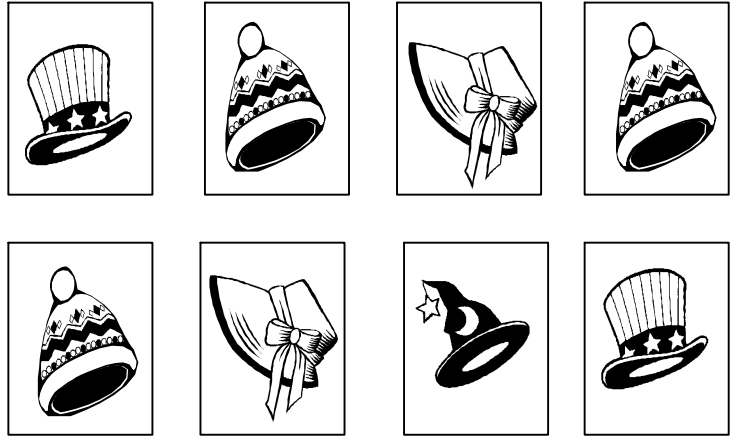






- a 
- b 
- c 
- d 

6. Brianna has 10 red, 15 yellow, and 20 green apples in a paper bag. If she picks one apple in the bag WITHOUT LOOKING, which color is she MOST likely to pick?

- f She is MOST likely to pick yellow.
- g She is EQUALLY likely to pick red, yellow, or green.
- h She is MOST likely to pick green.
- j She is MOST likely to pick red.

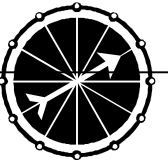
7. WITHOUT LOOKING, Brandon picked one of the picture cards. Which card is he LEAST likely to have picked?



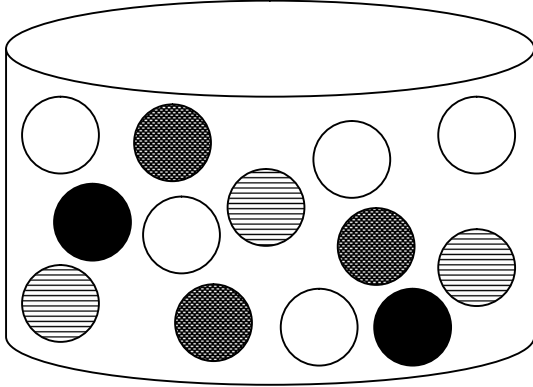
- | | |
|---|---|
| a  | c  |
| b  | d  |

8. Rachel is making a necklace out of beads. She has 8 white, 15 blue, 25 green, 30 red, and 40 yellow beads in a bag. If she picks one bead WITHOUT LOOKING, which color is she LEAST likely to pick?

- f white
- g green
- h red
- j yellow

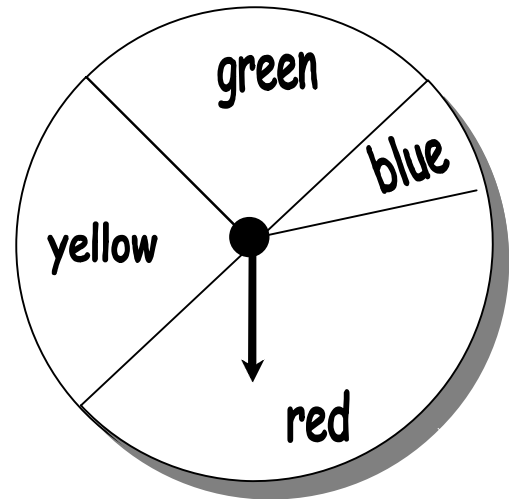


9. David reaches into a can of marbles WITHOUT LOOKING and takes one marble. Which marble is he MOST likely to pick?



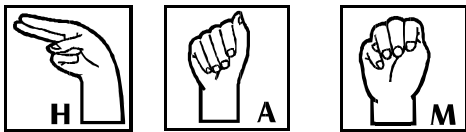
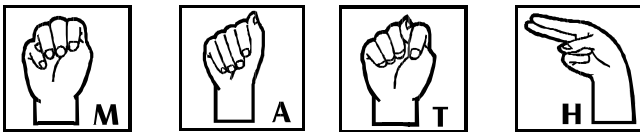
- a
- b
- c
- d

11. Joseph spun the spinner once. The arrow landed on red. If Joseph spins the spinner another time, on which color is the arrow LEAST likely to land?




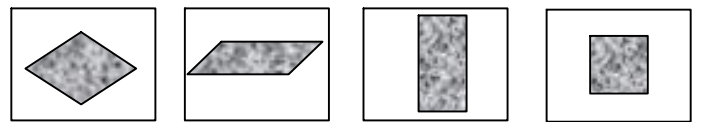
- a red
- b blue
- c green
- d yellow

10. Zachary found these cards in a box. If he picks one card WITHOUT LOOKING, which card is he LEAST likely to pick?



- a
- b
- c
- d

12. Stephanie is using these cards to learn the names of some quadrilaterals. WITHOUT LOOKING, she picks up one of the shapes. Which shape is she MOST likely to pick?



- f
- g
- h
- j