



Name \_\_\_\_\_ Date \_\_\_\_\_

1. What number is missing in the following pattern?

3 7 11 \_\_\_\_ 19 22

- a 13
- b 15
- c 17
- d 18

4. What two numbers are missing in the following pattern?

8 17 26 \_\_\_\_ \_\_\_\_ 53 62

- f 36, 46
- g 23, 30
- h 29, 30
- j 35, 44

2. What number is missing in the following pattern?

46 41 36 31 \_\_\_\_ 21

- f 30
- g 36
- h 26
- j 11

5. Which two numbers are missing in the following pattern?

63 60 57 \_\_\_\_ \_\_\_\_ 48 45

- a 54, 51
- b 52, 50
- c 55, 50
- d 55, 51

3. What number is missing in the following pattern?

12 24 36 \_\_\_\_

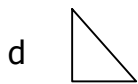
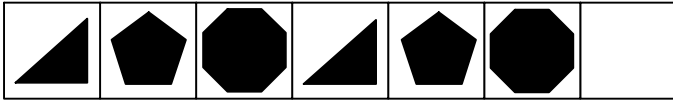
- a 48
- b 54
- c 46
- d 44

6. Which two numbers are missing in the following pattern?

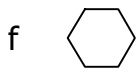
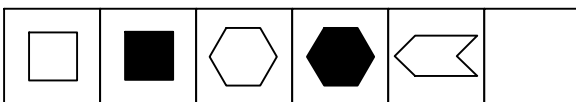
11 22 33 \_\_\_\_ \_\_\_\_ 66

- f 43, 53
- g 44, 54
- h 55, 77
- j 44, 55

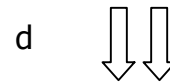

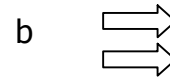
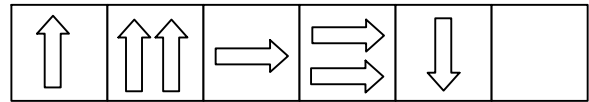
7. What is the missing shape in the pattern?




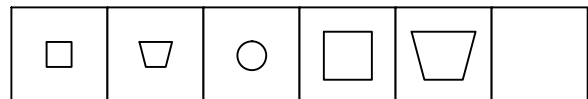
8. What is the missing shape in the pattern?



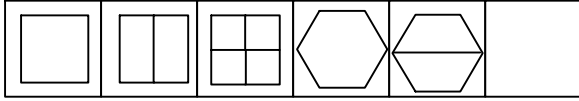
9. What is the missing shape in the pattern?



10. What is the missing shape in the pattern?

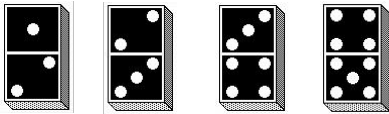


11. What is the missing shape in the pattern?



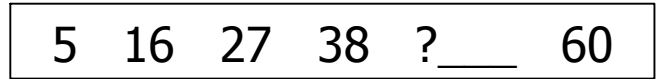
- a
- b
- c
- d

12. What is the next shape in the pattern?



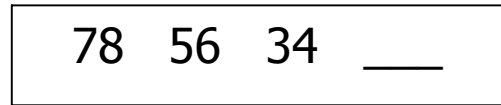
- f
- g
- h
- j

13. What number is missing in the following pattern?



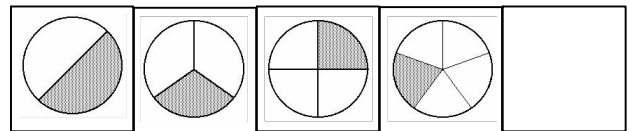
- a 48
- b 50
- c 49
- d 59

14. Which number is missing in the pattern?



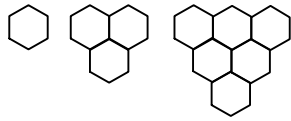
- f 24
- g 12
- h 89
- j 43

15. What shape is next in the pattern?

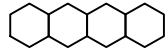


- a
- b
- c
- d

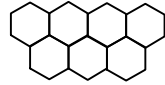
16. What should be next in this pattern?



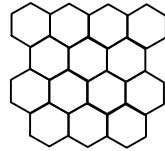
f



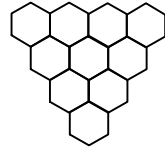
g



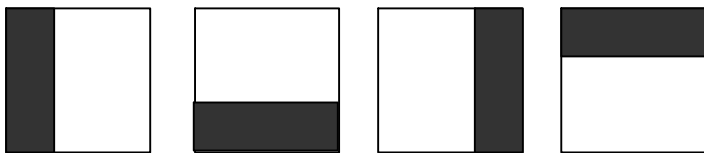
h




j




17. What should be next in this pattern?




a




c



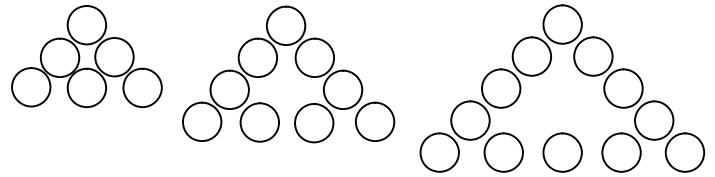
b



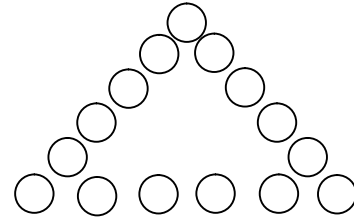
d



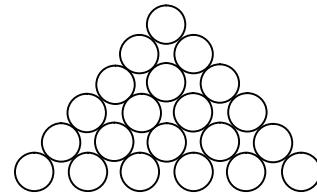
18. What should be next in this pattern?



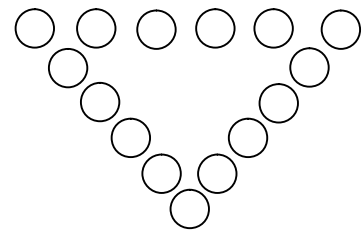
f



g



h



j

