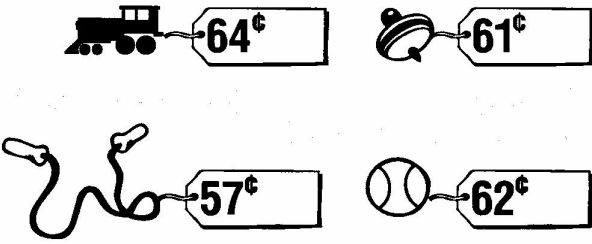


20. *TOYS 4 US* is having a sale. Which list below shows the sale prices listed from **greatest to least**?

(4A)



- 57, 64, 61, 62
- 64, 62, 57, 61
- 64, 62, 61, 57
- 57, 64, 61, 62

(4A)

Use the table below to answer question 21.

BIG SALE!	
ITEM	PRICE
Boots	\$45
T-Shirts	\$14
Shoes	\$61
Pants	\$67

21. Ally has \$25. What is the only item she can buy?

- Boots
- T-Shirts
- Shoes
- Pants

The table shows how far away some American cities are from New York City. Use the table to answer questions 22 – 24.

Name of City	Distance (in Miles) from New York City
Chicago	821
St. Louis	982
Atlanta	870
Detroit	640

22. If the cities in the table were listed in order from **least to greatest** distance from New York City, which city would be second on the list?

- Chicago
- St. Louis
- Atlanta
- Detroit

23. Which city is the **closest** to New York City?

- Chicago
- St. Louis
- Atlanta
- Detroit

24. Which city is the **farthest** from New York City?

- Chicago
- St. Louis
- Atlanta
- Detroit

(4B)

(4B)

Use the table to answer question 25.

NAME	AMOUNT EARNED
Tom	\$ 6.50
Dan	\$ 8.25
Jerry	\$ 9.75
Mari	\$ 7.50
Helene	\$ 5.75

25. Which 2 students both earned **more than** \$7.00 but **less than** \$9.00?

- Tom, Mari
- Jerry, Dan
- Dan, Mari
- Mari, Jerry

(4B)

26. Heather baked between 38 and 46 cookies. Which is the correct number of cookies she baked?

- 48
- 42
- 35
- 31

Mrs. Jobs wanted to buy one of the rings shown below. Use the prices to answer questions 27 and 28.



27. How many rings cost **less** than \$850?

- 1
- 2
- 3
- 4

28. How many rings cost **more** than \$800?

- 1
- 2
- 3
- 4

(4C)

(4C)

29. Sue owns 29 videos. This number is **closest** to

- 15
- 20
- 30
- 40

32. There were 62 new students in school last month. This number is a little

- less than 50.
- more than 50.
- less than 60.
- more than 60.

(4C)

(4C)

30. Jennifer read her book for 73 minutes. **About** how many minutes is that?

- 80
- 70
- 60
- 50

33. Tom finished solving 37 word problems. This number is

- a little less than 30.
- a little more than 30.
- a little less than 40.
- a little more than 40.

(4c)

(4C)

31. Mrs. Field baked 58 apple pies. Which number is **closest** to 58?

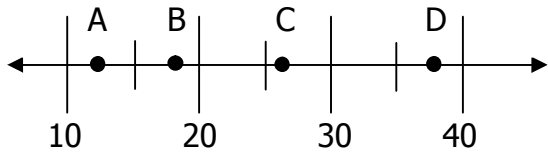
- 50
- 60
- 70
- 80

34. The movie lasted 91 minutes. The number 91 is

- a little less than 90.
- a little more than 90.
- a little less than 100.
- a little more than 100.

(4D)

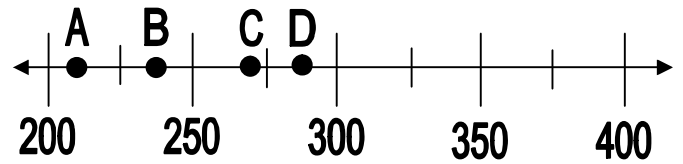
35. The number 27 would be **closest** to which letter on the number line?



- A
- B
- C
- D

(4D)

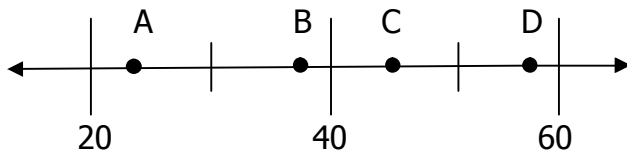
37. The number 238 would be **closest** to which point on the number line?



- A
- B
- C
- D

(4D)

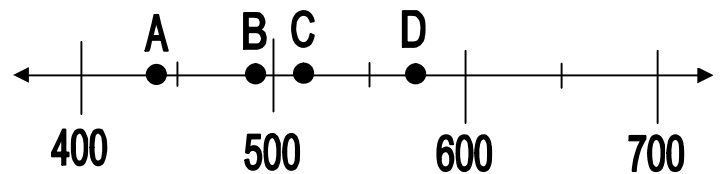
36. Which number does point B stand for on the number line?



- 38
- 58
- 22
- 42

(4D)

38. Which number would Point C be **closest** to on the number line?



- 520
- 440
- 575
- 490