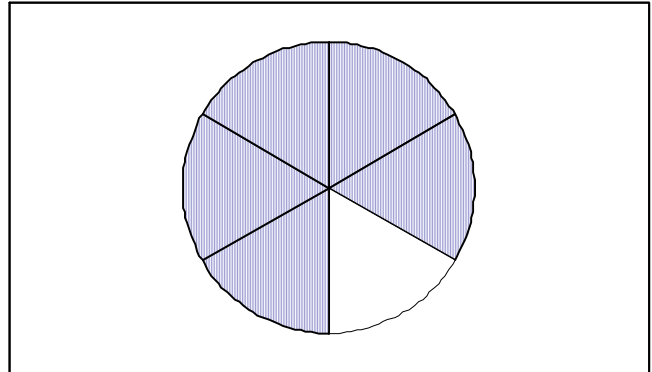


2b. Relate fractions and mixed numbers of regions and sets to pictures and vice versa.

How much of the circle is shaded?


- $1/5$
- $5/1$
- $1/6$
- $6/1$



VICE VERSA: WHICH FIGURE (OR SHAPE) SHOWS _____ shaded?

4 shaded figures are shown for the multiple choices.

What fraction of the set of clouds is shaded?

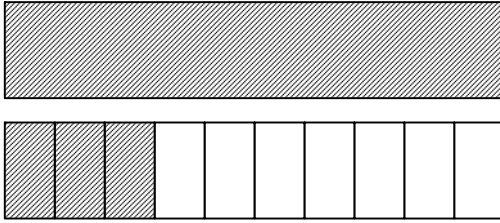


- $4/2$
- $1/4$
- $1/2$
- $2/3$

**VICE VERSA
QUESTIONS
ALSO
INCLUDED**

2b (Continued)

The shaded part of this picture shows which numeral or mixed number?



$$\boxed{} = \frac{1}{10}$$

- $1 \frac{3}{10}$
- $1 \frac{3}{7}$
- $1 \frac{1}{2}$
- 2

VICE VERSA QUESTIONS ALSO INCLUDED